









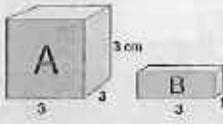



MONDAY

- What is the time? 
- One millennium = _____ years
- A truck has a tare of 8500 kg and an aggregate of 15 000 kg. How many kilograms can it carry? 
- How many 20c coins make up \$5.00? _____
- $48 \times 5 = 10 \times$ _____
- $10 - 0.08 =$ _____
- Add brackets to this number sentence.
 $6 \times 3 + 8 \div 2 = 22$
- $12.70 > 12.09$ true false
-   _____
Show this shape after a $\frac{1}{2}$ turn.
- Halve $\frac{1}{2}$ _____
- $2 \times 10^4 =$ _____
- A lolly jar contains 10 blue, 4 red and 6 white jelly beans. What is the chance of picking a blue bean?

- On your house plan a length of 8 m is indicated for a kitchen window. If the scale is 1:100, how long is the line on the plan? 
- $\$20.00 - \$6.35 =$ _____
- $81 \div$ _____ $= 9$
- $\frac{1}{8} = 0.$ _____
- What is the size of this angle? 
It is also known as an _____ angle.
- $18 \div 2 =$ _____ $\div 4$
- 25% of 200 = _____
- What is the volume of a box with measures of 50 cm length, 30 cm width and 20 cm height?
_____ cm^3

MY SCORE

TUESDAY


- Write the number one after 99 989. _____
- 
Draw another pentomino by changing only one block.
- If a race car's second track time of 9.19 seconds is 0.2 seconds faster than its first, what was the original time?
_____ 
- Share \$120 among 8 boys. _____ each
- Share \$120 among 16 boys. _____ each
- $1 - 0.04 =$ _____ , $10 - 0.04 =$ _____
- Halve $\frac{1}{4}$ _____
- How many B boxes fit into Box A? 
- If you can ride your bike 3 km in 12 minutes, how far can you ride in 1 hour? 
- Draw a reflection. 
- $7\frac{1}{10} - \frac{8}{10} =$ _____
- How many days are in a leap year?
- Name this shape. 
- What is the ratio of girls to boys if there are 15 girls to 3 boys?
- $25 \times \frac{2}{5} =$ _____ , $50 \times \frac{1}{5} = 20$
- 25% of 300 is _____
- $49 + 139 =$ _____
- The LCD of $\frac{2}{10}$ and $\frac{3}{4}$ is _____
- 8.1, 8.05, 8, _____ , 7.90, 7.85
- $72 \div 12 =$ _____ $\div 6$

MY SCORE

WEDNESDAY


- Write the number one after 109 999.
- $24 \times 10 = 5 \times$ _____
- Simplify $\frac{20}{24}$.
- $10^5 \times 4 =$ _____
- Antonio exchanged AUD \$50 for 20 euros. How many euros would he receive for AUD \$75.

6. Complete the pattern.



- $2000 - 350 =$ _____
- Draw after a $\frac{3}{4}$ turn anticlockwise. _____
- One century = _____ years
- 25% of 500 is _____.
- A dodecagon has _____ sides.

12. How many B boxes would fit into Box A?



- $5\frac{2}{10} - \frac{7}{10} =$ _____
- 8.5, 17, 34, 68, _____
- $82.95 \div 10 =$ _____
- A bus timetable shows 8-minute intervals between each stop. If a bus leaves its depot at 9.02 am and has four stops, at what time does it reach its final destination?



17. Add brackets to this number sentence.

$$9 \times 3 - 18 \div 2 = 18$$

18. How many pens are there altogether?

Pens in class



19. $9 + 8 + 4 =$ _____

20. Penelope, the perfume queen, has 12 x 50 mL and 7 x 25 mL of perfume. How many mL of fragrance does she have?

MY SCORE

THURSDAY

1. $\frac{2}{100} + \frac{2}{10} = 0.$ _____

2. If $4 \times b = 36$, then $b =$ _____.

3.



What is the size of this angle? _____

4. 25% of 800 is _____.

5. One decade = _____ years

6. If a race car's second track time of 8.01 seconds is 0.3 seconds slower than its first, what was the original time?



7. $12 \times 9 = 3 \times$ _____

8. Is 621 divisible by 9? yes no

9. $9 \overline{)342} =$ _____

10. On a plan, how many centimetres long will a wall be if its actual length is 12 m and the scale is 1:100?



11. How many 50c coins make up \$15.00? _____

12. $12 \div 3 = 24 \div$ _____

13. $4\frac{8}{10} + \frac{7}{10} =$ _____

14. Draw the pentagon's diagonals. How many are there?



15. $0.3 + 0.09 + 0.004 =$ _____

16. $2 - 0.09 =$ _____

17. $81 \times \frac{1}{9} =$ _____

18. Share \$40.00 among 16 people.

_____ each

19. $71.69 \div 10 =$ _____

20. A regular octagon has a perimeter of 40 cm. What is the length of one side?

MY SCORE