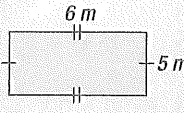

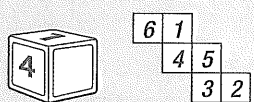


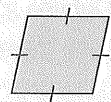

MONDAY

- What is the time if the big hand is on 5 and the little hand is between 2 and 3?
- $0.98 + 0.1 =$
- $9 + 8 =$, $90 + 80 =$
- Write $3\frac{4}{5}$ as an improper fraction.
- Perimeter = _____ m 
- $0.8 > 1$ true false
- $10\text{ t} =$ _____ kg
- Which 2 equations are true?
 (a) $81 \div 9 = 9$ (b) $99 \div 9 = 10$
 (c) $45 \div 9 = 6$ (d) $36 \div 9 = 4$
- This quadrilateral is known as a _____ 
- 1200, 1150, _____, 1050
- Write 50 in Roman numerals.
- $3 \times 8 =$ _____
- Write 60% as a decimal.
- You ride your bike 5 km in 20 minutes. Keeping the same speed, how far will you ride in an hour? _____
- What is n ? $n \div 2 = 7\text{ r }1$
 _____ $\times 2 + 1 =$ _____
 $n =$ _____
- $\frac{1}{4}$ of 400 = _____
- Write the missing number from the blank face of the cube.

- If you read a map with a scale of 1 cm = 10 km, how far is it from Windy to Sindy if you measured 11 cm?

- $\begin{array}{|c|c|} \hline 8 & 7 \\ \hline \end{array} + \begin{array}{|c|c|} \hline 1 & 9 \\ \hline \end{array} = \begin{array}{|c|c|} \hline 2 & 8 \\ \hline \end{array} \begin{array}{|c|} \hline 2 \\ \hline \end{array}$
- A triangular pyramid has _____ edges.

MY SCORE

TUESDAY

- In 308 642 what is the place value of 0?
- 0.3, 3, 30, _____, 3000
- $9997 + 8 =$ _____, $99\ 997 + 8 =$ _____
- In which season does September occur?
- Write $4\frac{4}{10}$ as an improper fraction.
- Write *five thousand and eight* as a numeral.
- Write 35% as a fraction.
- If the day before yesterday was Tuesday, what is the day after tomorrow?
- Is a tonne of cotton wool or a tonne of bricks heavier?
- This is a:
 rhombus.
 kite.
 rectangle. 
- $10 \overline{)205} =$
- What is cheaper, 4 yoyos for \$10 or 9 yoyos for \$18?
- If a class has 25 girls and 25 boys, what is the ratio of girls to boys?
- $800 - 75 =$
- Show as a $\frac{3}{4}$ turn anticlockwise. 
- A dishwasher uses 24 L of water per wash. If you use it once each day, how many litres of water are used per week?
- $\$50.00 - \$15.50 =$
- $17 \div 7 = 17 \div 7 =$ _____ r _____
- 1750 hours is the same as '10 to _____'.
- A square pyramid has _____ edges.

MY SCORE

WEDNESDAY

1. Write the highest even number possible using these digits: 7, 1, 4, 9, 0.

2. What is n if $n \div 6 = 4 \text{ r } 2$?

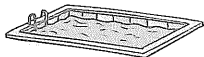
3. $27 \times 10 = 54 \times 5$ true false

4. $\frac{3}{4} > 1$ true false

5. This 3-D shape is commonly known as a



6. Alexander swam 50 m in 59.4 seconds. If the next fastest was Matthew (who was 0.5 seconds behind Alexander), what is Matthew's time?

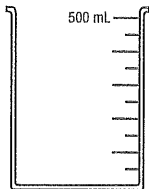


7. Write a number sentence using 4, 12 and 48.

8. If there are 8 girls and 4 boys, what is the ratio of girls to boys?

9. 0202 hours = am or pm

10. Samantha, a scientist, poured 350 mL of H_2O . Mark this level.



11. The sum of all angles in a triangle equals

12. 10 kg = g

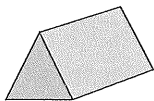
13. $5 + 8 + 7 =$

14. 3.1 m = mm

15. 0.8, , 1.6, 2.0

16. This is a:

- (a) triangular prism.
 (b) rectangular pyramid.
 (c) triangular pyramid.



17. $143 -$ = 128

18. $900 - 35 =$

19. Double $\frac{3}{4}$

20. $\$50.00 - \$14.50 =$

MY SCORE

THURSDAY

1. Write the lowest odd number using these digits: 6, 2, 8, 7, 3.

2. $99\,999 + 5 =$

$999\,999 + 5 =$

3. This is a list of four swimmers and their times for a 50-m swim. Order them from first to fourth.

| | |
|--|--------|
| <input type="checkbox"/> Matthew | 59.8 |
| <input type="checkbox"/> Paul | 1.00.4 |
| <input type="checkbox"/> Alexander | 59.1 |
| <input type="checkbox"/> Ivan | 59.6 |

4. $\frac{1}{3} < 1$ true false

5. What is the lowest composite number?

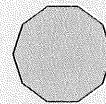
6. Write $5\frac{1}{4}$ as an improper fraction.

7. 4 L = mL

8. What is n if $n \div 4 = 8 \text{ r } 3$? $n =$

9. 400, 800, 500, 900, 600,

10. This 2-D polygon is a

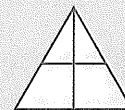


11. $1300 > 1333$ true false

12. $26 \times 10 = 52 \times$

13. $\begin{array}{|c|c|} \hline 2 & 6 \\ \hline \end{array} + \begin{array}{|c|c|} \hline 3 & 8 \\ \hline \end{array} = \begin{array}{|c|c|c|} \hline 2 & 8 & 4 \\ \hline \end{array}$

14. How many triangles can you find?



15. $1.35 = 1 + 0.3 +$

16. What is the ratio of lemons to oranges if a bucket had 20 lemons and 4 oranges?

:

17. $4 \times 9 =$

18. Write 100 010 in words.

19. 0955 hours = am or pm

20. 3.5 km = m

MY SCORE

F