




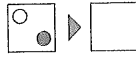

MONDAY

- If the day after tomorrow is Tuesday, what was yesterday?
- Divide a number by 3, multiply it by 4 and the answer is 20. What is the starting number?
- $\frac{10}{50} = \frac{\quad}{100}$
- $700 + 800 =$
- If the diameter is 5 cm, the radius is \quad cm.
- $28\ 808 - 10 =$
- The place value of 1 in 147 500 is \quad .
- $0.717 = 0.\quad + 0.0\quad + 0.00\quad$
- A pentagonal pyramid is also \quad known as a \quad hedron.
- Longreach 39 km* 

If a rider is 15 km away from Longreach, how many kilometres have they ridden from the sign?
- $\frac{10}{100} = 0.\quad = \quad\%$
- $1 \div 4 = \frac{1}{4} = 0.\quad$
- $12^2 =$
- $\frac{2}{3}$ of 300 = \quad
- Simplify $\frac{15}{18}$
- Round 233 949 to the nearest ten thousand.
 \quad
- What is the diameter of a circle if its radius is 5 cm?
- If a south-easterly wind was blowing, in which direction would your hot air balloon be heading? 
- If the rule is $5x$, complete this pattern.
13, 65, 325, \quad .
- Your teacher gives 2 stickers to each student. If there are 50% more boys than girls and the total of stickers given to the boys is 36, how many stickers in total are given to the girls?

MY SCORE

TUESDAY

- Round 11 501 to the nearest thousand.
- $\frac{5}{8} = \frac{\quad}{16}$
- $0.08 + 0.09 + 0.3 =$
- 9 ha = \quad m²
- $11 \times 12 =$
- If you start at 920 and increase by 9s, what is the 6th number in the sequence?
- $12 \times \quad = 44 \times 3$
- Marty rides his bike 5 km in a quarter of an hour. Keeping the same speed, how far will he ride in three hours? \quad km 
- If $n \div 4 = 8 \text{ r } 2$, then $n =$ \quad .
- Which letter shape is not symmetrical?
B G K T
- $72 \div \quad = 3 \times 3$
- The number one before 19 000 is \quad .
- $9 - 8\frac{1}{3} =$
- How many surfaces does a sphere have?
- Show as a 270° turn anticlockwise. 
- Write as a number sentence: There are 4 pens in each tub. How many pens are there altogether? 
- Which number sentence matches: 18 horses are kept in 6 stables?
(a) $18 + 6$ (b) $18 \div 3$
(c) $18 \div 6$ (d) 18×6
- In which direction would your hot air balloon be heading if the wind was a south-westerly?
- In your pocket you have \$2 x 2, \$1 x 1, 50c x 3 and 20c x 6. How much money do you have?
\$ \quad
- The difference between 12 and 9 is \quad .

MY SCORE

WEDNESDAY

1. If the day before yesterday was Thursday, what day is tomorrow?

2. $6\frac{1}{4} + \frac{3}{4} =$

3. If $5 \times 8 = 25 + a$, then $a =$

4. $7.117 \times \quad = 7117$

5. $10 \text{ ha} = \quad \text{m}^2$

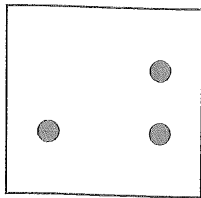
6. $219 \times 6 =$ odd or even?

7. $11 \times 0.09 =$

8. Label and draw arrows to show:

(a) A to B is north.

(b) B to C is south-west.



9. $91\,594 - 10 =$

10. Draw the reflection of the number shapes. **59**

11. For this set (14, 70, 350, 1750,) the rule is $5x$, which number is next?

(a) 8750 (b) 8755 (c) 8751 (d) 8749

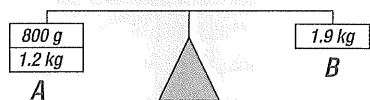
12. If you look at a person's eye, does it have a concave or convex shape?

13. 20, 14, 23, 17, 26,

14. Write *eight hundred and twelve thousand, two hundred and ten* as a numeral.

15. $10 \times 12 =$

16. Shade the side that is heavier.



17. $4 \overline{)32.8} =$

18. Write $7\frac{3}{4}$ as an improper fraction.

19. $800\,000 - 10\,000 =$

20. If $n \div 3 = 8 \text{ r } 2$, then $n =$

MY SCORE

THURSDAY

1. If the day after tomorrow is Wednesday, what was the day before yesterday?

2. The number 10 before 11 100 is

3. $4.5 \times 10 =$, $4.5 \times 100 =$

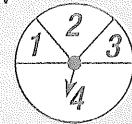
4. What is the chance of the arrow landing on 4?

(a) 0.5

(b) 0.3

(c) 0.25

(d) 0.4



5. Round 2903 to the nearest thousand.

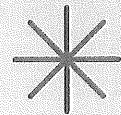
6. $4\frac{3}{5} + 3\frac{2}{5} =$

7. $38\,804 - 9 =$

8. Write 101101 in words.

9. $10^4 = \quad \times \quad \times \quad \times \quad =$

10. This has rotational symmetry to the order of



11. $4 \div 8 =$

12. $\$50.00 - \$48.40 =$

13. If $a + 32 = 6 \times 7$, then $a =$

14. How many square metres of carpet would you need if your bedroom was 6 m by 7 m?
m²

15. $29 \times 3 =$


16. 100, 81, 64, , 36

17. 11 minutes later =

18. $147 \times 7 =$ odd or even?

19. $500\,000 - 50\,000 =$

20. A wizard needs 1.5 L of olive oil for his magic potion. Shade this amount.



MY SCORE