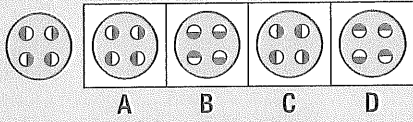
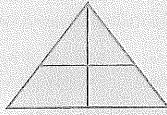


MONDAY

- $200 - 125 =$
- $9997 + 9 =$
- How many triangles can you find?
- Write $\frac{1}{4}$ as a decimal.
- Share \$210.00 equally among 21 people.
\$ each
- What is the product of 3 and 6?
- $\$4.25 + \$7.75 = \$$
- $0.5 > 1$ true false
- Circle the matching shape.



- Round 17 850 to the nearest thousand.

- $3789 > 3699$ true false

- $4 \overline{)652} =$

- Can a circle tessellate?

- $5.40 \rightarrow 6.15$

How many minutes difference?

- Round 7.334 to the nearest hundredth.

- $7 + 29 =$

- Which of these are legal tender?

- marbles
- 50c coins
- credit card
- \$10 notes

- $\frac{4}{100} + \frac{8}{10} =$ (Write the answer as a decimal.)

- How many weeks are in a year?

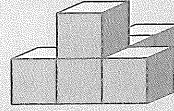
- What is the place value of 2 in 27 500?



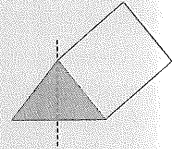
MY SCORE

TUESDAY

- $400 - 125 =$
- $301 - 7 =$
- Write $\frac{3}{4}$ as a decimal.
- $6 \times 9 =$
- $3.1 - 0.8 =$
- Draw the top view.



- If $a = 6$, then $a \times 7 =$
- The cross-section made after the cut is what 2-D shape?



- $0.7 \times 5 =$
- Draw a $\frac{3}{4}$ turn clockwise.

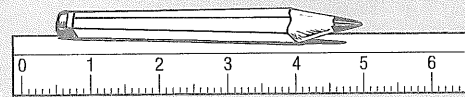


- $60 \times 8 = 480, 59 \times 8 = 472, 58 \times 8 =$

- How many degrees are in a straight line?

- odd \times odd =

- A circumference is the distance around what shape?



- What is the length of this pencil? mm

- 3.7, 3.8, 3.9,

- $9091 - 100 =$

- $2173 - 74 =$

- (Roman numeral) LIX =

- $44 \times 7 = (\text{ } \times 7) + (\text{ } \times 7)$
= +
=

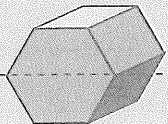


MY SCORE

WEDNESDAY

- $500 - 125 =$
- $\frac{1}{5}$ of 420 =
- $2.2 + 0.8 =$
- $90 \times 9 = 810$, $89 \times 9 = 801$,
 $88 \times 9 =$, $87 \times 9 = 783$
- What is the date one week before 5 April?


- $2.3 - 0.5 =$
- $1000 - 23 =$
- The cross-section made after the cut is what 2-D shape?



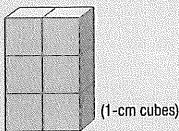
- 25, 50, 100, 200,
- $\frac{9}{10} + \frac{5}{10} =$, $\frac{1}{10} =$
- How many degrees in a right angle?
- $1000 + 23 =$

- $\$8.75 + \$13.25 =$
- $2.4 \text{ km} =$ m

- Packets of potato chips are in 250 g boxes. If a box holds 5 packets, what is the weight of each packet?



- What is the surface area?



- What is the missing factor of 24?
1, 2, 3, 4, , 8, 12, 24

- By what name is this closed curve known?



- $36 \div 4 =$, $72 \div 4 =$
- What is the perimeter of a regular hexagon with 10-cm sides?

MY SCORE

THURSDAY

- $800 - 125 =$
- How many minutes difference?

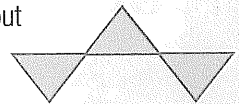


- $10\ 000 - 34 =$
- $5 \overline{)260} =$
- How many degrees are in a circle?

- $5.1 \text{ m} =$ mm
- $320 - 90 =$

- (Roman numeral) LXIX =
- 30, 70, 120, 180, , 330

- Can you trace this shape without lifting your pencil or retracing?

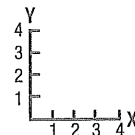


- $2.2 - 0.8 =$

- $\frac{9}{10} + \frac{7}{10} =$, $\frac{1}{10} =$

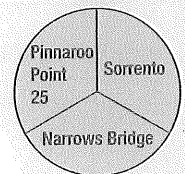
- $63 \div 9 = 70 \div$

- Write an A at grid coordinates (1,3).



- How many people preferred Sorrento and the Narrows Bridge?

Preferred fishing spots



What fraction liked Pinnaroo Point?


- What number is one after 19 899?

- $0.4 + 0.9 =$

- What is the area of a 7 by 4 grid?

squares

- What is the mean of the batting scores for this team?



runs

- Write *one hundred and ten thousand and ten* in numerals.

MY SCORE