

MONDAY

1. What is the time?




July						
Su	Mo	Tu	W	Th	F	Sa
6	7	8	9	10	11	12
13	14	15	16	17	18	19
20	21	22	23	24	25	26
27	28	29	30	31		

- How many weekends are in July?
- How many Thursdays are in July?
- Circle the 8th. What is the date one fortnight after?
- What is the following month?
- What is the month prior to July?
- Name this 3-D shape.



- Write *ten thousand* as a numeral.
- Name this 2-D shape.



- Round 851 to the nearest 100.
- This shape is a .
- $4 \times 6 = 6 + 6 + 6 + 6 =$
- What is the difference between 12 and 8?
- If a block of chocolate has 20 pieces and you have bought 2 blocks, how many pieces do you have?

15. Which set has two even numbers?
 7, 8 10, 8 2, 11 4, 9

16. 1 km = 1000 m
 2 km = _____ m

17. 1 L = 1000 mL
 2 L = _____ mL

18. 1 m = 100 cm, so
 5 m = _____ cm

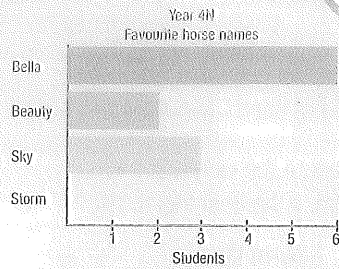
19. $1000 - 10 =$

20. It is best to measure the mass of a pencil in:
 grams.
 kilograms.
 tonnes.

MY SCORE

TUESDAY

1. What is the time?



- How many children were surveyed?
- Which name is the favourite?
- How many more like Bella than Beauty?
- Which rotation will make this picture upright?




- A 1/2 turn B 1/4 turn
 C 1/4 turn


- Write the number one after 199.
- If you received $\$2$ $\$2$ $\$1$ $50c$ as change from \$10, what did you spend?

- The product of 7 and 3 is _____.
- A pentagon has _____ sides.

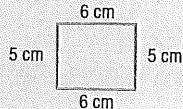
10. Round 949 to the nearest 100.

11.  What is the chance of the arrow landing on a 2?

- 2 in 4 1 in 6
 2 in 6 1 in 2

- Halve 98.
- 1, 3, 6, 10,
- $11 \times 8 =$
- What direction is this? 

16. What is the difference between 16 and 9?

17. Perimeter = _____


18. $303 > 330$ true false

19. $350 + 450 =$

20. $79 \times 10 =$

MY SCORE

WEDNESDAY

1. What is the time?



2. What is the number between 2099 and 2101?

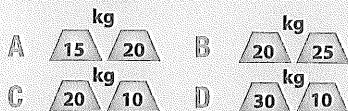
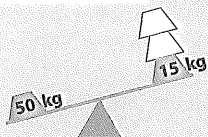
3. If $4 \times 7 = 28$, then $28 \div \square = 7$

4. (Roman numerals) $X - IV = \square$

5. $1200 - 500 = \square$

6. Write *one thousand, three hundred and three* as a numeral.

7. Which set of weights will balance the seesaw?



8. What set of numbers are all odd?

- 3, 5, 9 3, 6, 10
 9, 20, 15 11, 7, 8

9. Does $0.03 = \square \frac{3}{10}$ or $\square \frac{3}{100}$?

10. 200, 185, 170, \square , 140

11. Alex had 4 buckets, each holding 9 tennis balls. How many tennis balls were there altogether?

12. Will this shape tessellate?

yes no



13. Write a number sentence for Question 11.

14. What is the difference between 100 and 30?

15. $200 - 70 = \square$

16. Write $\frac{5}{100}$ as a decimal.

17. Flip horizontally.



18. How many weeks are in one fortnight?

19. $500 - 350 = \square$

20. $3249 = 3000 + \square + 40 + 9$

MY SCORE

THURSDAY

1. What is the time?



2. $15 + 65 = \square$

3. $80 + 50 = \square$

4. $4 \times 6 = \square + \square + \square + \square = \square$

5. How many days are in September?

6. (Roman numerals) $XI - V = \square$

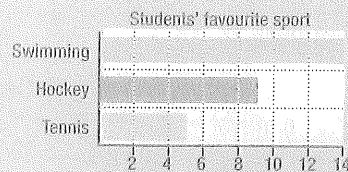
7. Draw a horizontal line.

8. If $60 \times 3 = 180$, then $59 \times 3 = \square$

9. $10^2 = \square \times \square = \square$

10. Halve 70.

11. How many students like swimming more than tennis?



12. How many students did not choose swimming?

13. How many months are in summer?

14. = \$ \square

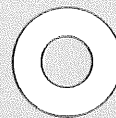
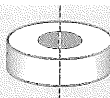
15. R = red
B = blue
G = green

What is the chance of picking a red ball (without looking)?

16. Draw a line across one of the marks to make 2 squares.

17. What month is it currently?

18. Which shape will this make if you cut along the line?



A

B

C

19. What month can have 28 or 29 days?

20. If $1 \text{ kg} = 1000 \text{ g}$, then

$2000 \text{ g} = \square \text{ kg}$.

MY SCORE