


MONDAY

1. This prism has corners.



2.  Half past or .30

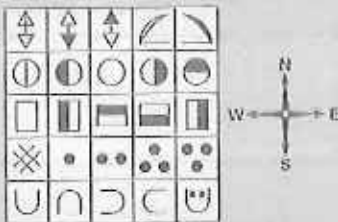
3. How many days are in one week?



Double the fish's stripes

=


5. 50, 55, 60, 65,

6. 

Start at the bottom left-hand corner, go north 3, east 4, west 2, south 2 and you land on .

7. 5 3 = 15

8. 5 3 = 8

9. 
Draw a dot halfway between A and B, label as C.

10. Draw a dot halfway between A and C, label as D.



TUESDAY

1. Quarter past

or .15



2. $40 + 70 =$

Rainfall table (mm)

	Mildura	Upper Swan
June	120	78
July	97	121
August	104	107
Total	321	306

3. Which place recorded the most rainfall?

4. Which place and month was the most wet?

5. Which place and month was the most dry?

6. $50 + 4 =$

7. 3, 6, 9, 12,

8. $3 \times 4 =$

9.

A	B	C	D
A	B	C	D
A	B	C	D

Is BBB a row or a column?

10. If $3 \times 1 = 3$ and $3 \times 10 = 30$, then $3 \times 100 =$.




WEDNESDAY

1. If you fold along the dotted line, would area A match area B?

yes
no



2. Estimate how many steps it would take to walk around the whole classroom?

3. 

Start at the centre, go north 2, west 1, south 3 and east 3. What position do you finish at?


4. 9 $2 = 11$

5. 9 $2 = 18$

6. If $7 \times 1 = 7$ and $7 \times 10 = 70$, then

$7 \times 100 =$.

7. Which shape is shaded as a half?



8.

$140 + 100 = 240$
$240 + 100 = 340$
$340 + 100 =$ <input type="text"/>

9. \$50 doubled =

10. Quarter past

or .15




THURSDAY

1. If A and B match when folded, is the circle symmetrical?

yes no



2.  Draw hands to show 3.30.

3. Which shape covers less area?

A B



4. Double $\$50 =$

5. $80 + 4 =$

6. Write two number sentences using the number family of 6, 8 and 14.

+ =
 - =

7. $100 - 70 =$

8. Who is the youngest?

Domenic

(born 12 Jan. 2008)



Gavin

(born 28 Dec. 2007)

9. $7 \times 8 = 15$

10. $8 \times 4 = 2$

11. Tick the set with 2 even numbers.

A (6, 9) B (8, 1)

C (10, 4) D (3, 7)



Big Ted has \$1. He wants to buy honey. Which is his cheapest choice?

A Buy 2 half tubs

B Buy 1 full tub

13. If $9 \times 1 = 9$ and

$9 \times 10 = 90$, then

$9 \times 100 =$

14. $16 \div 2 =$

15. 0, 5, 3, 8, 6,

The pattern's rule is
 + , then - .

MY SCORE

FRIDAY

1. Is this shape a square, a cube or both?



2. If today is Friday, what is the day after tomorrow?

3. $4 \times 4 = 16$

4. $4 \times 4 = 1$

5. $11 - 9 =$

6. Draw hands to show 5.15.

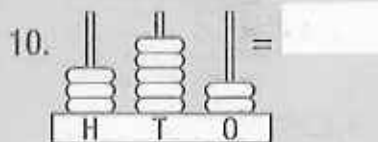


7. How many seconds are in one minute?

8. $500 + 500 =$

9. How many \$5 make up

$\$20 + \$10 = ?$



11. $41 - 10 =$

12. Shade the top left-hand corner.



13. Shade the bottom right-hand corner.



How far is it between these two places?

15. $15 + 6 =$

MY SCORE