

MONDAY

1. Name a shape that does not have any corners.

2. $3 + 4 =$

3. $5 + 5 + 5 =$

4. 3 lots of 5 =

5. Half past

or .30



JANUARY

Su	M	Tu	W	Th	F	Sa
		1	2	3	4	5
6	7	8	9	10	11	12
13	14	15	16	17	18	19
20	21	22	23	24	25	26
27	28	29	30	31		

6. What is the date of the first Saturday in January?

7. What day is the 1st?

8. What day is the 10th?

9. Add **\$1** **10c** **50c**

= \$



How many more blocks are needed to make 60?

MY SCORE

TUESDAY

1. Half past

or .30



3. This pyramid

has corners.



4. $50 + 3 =$

5. Estimate how many of your hand's palms would be needed to cover this page.

6. $78 + 10 =$

7. $99 - 9 =$

8. Does $150 + 10$ or $100 + 16 = 160$?

9. (a) 3 $10 = 30$

(b) 5 $3 = 2$

(c) 90 $10 = 9$

(d) 5 $3 = 8$

10. A leaves Cairns at and arrives at its destination at . How many hours was the bus trip?

MY SCORE

WEDNESDAY



2. Order these numbers from lowest to highest.
17, 33, 19, 45

3. Estimate the number of your palms that would be needed to cover your desk?

4. Does $190 + 10$ or $100 + 20 = 200$?

5. $6 + 6 = 2 \times$

6. A 4×5 B 7×3

C 2×9 D 4×4

Which box shows the greatest value?

7. Which shows the smallest value?

8. 3 $4 = 7$

9. 5 $2 = 10$



Which shape is not a hexagon?

MY SCORE

THURSDAY



2. $30 + 70 =$

3. $4 + 4 = 2 \times$

4. Half past

or .30



5. If a butterfly lands on 5 flowers in 1 hour, how many flowers in 4 hours?



6. $100 - 20 =$

7. $10 + 10 + 10 = 3 \times$

8.

299	300	301	<input type="text"/>
<input type="text"/>	400	<input type="text"/>	402

9. $4 \times 4 =$

10. $5 + 4 + 3 + 2 + 1 =$

11. Tick the set with 2 odd numbers.

A (4, 6)

B (5, 8)

C (5, 10)

D (7, 9)

12. $17 + 4 =$

13. $100 + 900 =$



Fluffy

(F)

Scruffy

(S)

Tuffy

(T)

Match the correct kennel to each dog.

(i) Fluffy's kennel has horizontal stripes.

(ii) Scruffy's has a curved roof.

(iii) Tuffy's has neither vertical stripes or a curved roof.



A



B



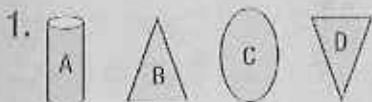
C

15. Double 10.



MY SCORE

FRIDAY



Which shape does not belong?

2. $3 + 3 =$ $\times 3$

3. Halve 20.

4. Add \$10 \$5 \$2

\$1 = \$

5. Half past

or .30



6. Tick which apple is heavier.

A

B




7. Order the expressions from the least to greatest in value.

$4 + 9$ $5 + 6$

$6 + 4$ $5 + 7$

8. Measure the shape's sides.



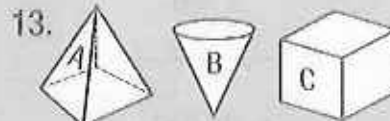
9. $3 \times$ = 6

10. Share 4 cakes evenly between 2 students.

cakes each

11. $9 \times 9 = 18$

12. $8 \times 2 = 16$



Match the 3-D shapes.

cone pyramid

cube

14. $12 - 7 =$

15. $40 + 80 =$



MY SCORE