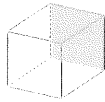


MONDAY

1. How many corners (vertices)?



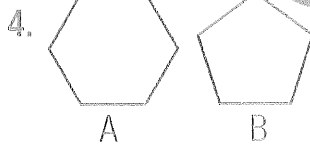
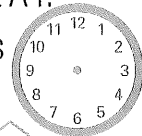
	A	B	C	D	E	F	
4							4
3							3
2							2
1							1
0	A	B	C	D	E	F	0



2. Draw the flight path for the Oz Air's plane.

Flight A59 left Melbourne airport at F3 and flew to D1. From there it flew to D4, then to C2, then to B1 and it landed at A4.

3. Draw the hands to show 7.25.



A is a .

B is a .

5. $65 + 35 =$

6. Flip the shape and draw its new position.

7. $7 + 9 =$

8. How many months in one year?

9. Which number is closer to 1023?


- A 1000 B 1030
C 1020

10. $111 - 10 =$



TUESDAY

1. Draw hands to show 8.25.




2. How many edges?

3. How many months in one-quarter of a year?

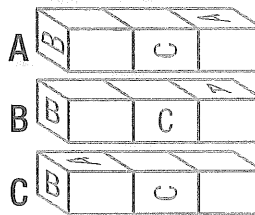
4. $60 + 50 =$

5. $150 - 50 =$

6. What is the total amount of money? \$



7. Which block matches?



8. Which number is between 1079 and 1081?

9. Write two number sentences with 6, 7 and 13.

$+ =$

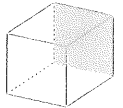
$- =$

10. $40 + 40 + 40 =$



WEDNESDAY

1. How many faces?



AUGUST

Su	M	Tu	W	Th	F	Sa
	1	2	3	4	5	6
7	8	9	10	11	12	13
14	15	16	17	18	19	20
21	22	23	24	25	26	27
28	29	30	31			

2. What date is the first Saturday?

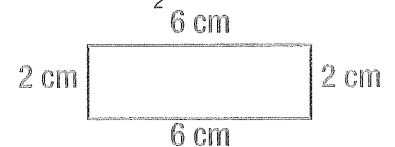
3. Circle the 4th, 11th, 18th and 25th.

4. On what day(s) do these dates fall?

5. $45 + 23 =$

6. Alison has 6 apples and cuts them into halves. Her sister, Jessica, eats 5 halves. How many apples are left?

- A $3\frac{1}{2}$ B 3
C $4\frac{1}{2}$ D 4

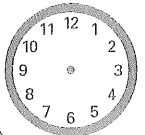


7. What is the perimeter? cm

8. Kensington Football Club kicked 10 goals and 7 points. If 1 goal equals 6 points, what is the total number of points?

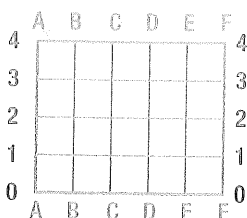

9. $80 - 35 =$

10. Draw hands to show 10.25.



THURSDAY

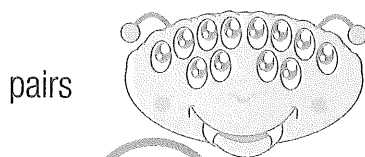
1. Draw the two shapes made after cutting the square as shown.



9. Draw the flight path for the Oz Air's plane.

It left Sydney airport at D4 and flew to A3, C1, D2, E0 and landed at F3.

10. How many pairs of two-lense sunglasses does the eye monster need?



pairs


11. If you have a \$5.00 note and buy a toy for \$4.60, how much change do you have?



c

12. $600 + 800 =$

13. Flip the shape and draw its new position.



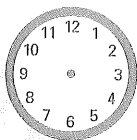
14. $18 + 12 =$

15. $70 + 70 + 70 =$

C

2. $25 + 45 =$

3. Draw hands to show 2.25.



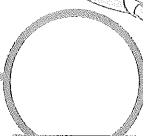
4. $140 - 40 =$

5. $27 \div 3 =$

6. $4 \times 6 =$

7. $4 \times 1000 =$

8. $1200 - 300 =$



MY SCORE

FRIDAY

1. Draw the two shapes made after cutting the triangle.



2. $65 + 15 =$

3. $900 - 10 =$

4. Which shape is divided as one-half?



A



B



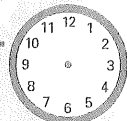
C

5. $79 + 6 =$

6. 11, 16, 21, , 31

The pattern's rule is +

7. Draw hands to show 12.25.



8. Order the race horses.



4 crossed the line before **11**.

8 crossed the line after **6**, but **11** crossed before **6**.

1st 3rd
2nd 4th

9. $7 + 5 =$

10. Which set has 2 odd numbers?

A (5,8) B (9,4)

C (3,7) D (9,6)

11. $100 + 800 =$

12. How many eggs are in one dozen?

13. $109 + 2 =$

14. $40 \div 5 =$

15. Write fifteen dollars and forty cents.

\$



MY SCORE