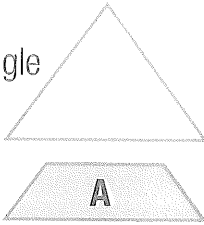



MONDAY

1. Draw a line on the triangle to copy Shape A.



2. What is the total amount of these stacks of coins?



3. Twenty-five past or

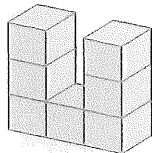


4. $800 + 70 + 8 =$

5. Does $4 \times 6 = 24$ or 36 ?

6. $35 + 25 =$

7. Draw a top view.



8. Draw a right side view.

9. Draw a front view.

10. If your new car uses 1 litre of petrol to travel 8 kilometres, how far can it go with 4 litres?

km



MY SCORE

TUESDAY

1. Twenty-five past or



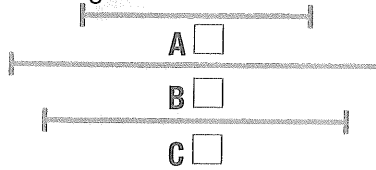
2. Draw a line on this shape to copy Shape B.



3. $1000 + 700 + 20 + 6 =$

4. $3 \times 5 = 15$ 20

5. Which line is 5 cm in length?



6. Penny is given \$5 per week in pocket money. She saves all her money for 4 weeks. How much money does she have?

\$

7. Write the number one after 1099.

8. Saul had 3 apples and cut them into halves. He then ate 3 halves. How many whole apples were left?

- A $1\frac{1}{2}$ B 3
C 2 D $3\frac{1}{3}$

9. $700 - 10 =$


10. Name an item in your house or school that has this shape.



MY SCORE

WEDNESDAY

1. Draw a line on this square to copy Shape B.



2. $90 + 7 + 300 + 1000 =$

3. $9 \times 4 =$

4. $13 - = 9$

5. Write *twelve dollars and eighty-five cents*.

\$

6. What is the total amount of these stacks of coins?

\$



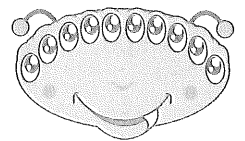
7. Alicia picked 5 apples and cut them into halves. Her dad ate 4 halves. How many whole apples were left?

- A 2 B 3
C 1 D 4

8. If you count 20 shoes in an elevator, how many people are there?

people

9. Double the eyes on the eye monster. How many?

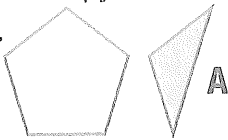


10. Twenty-five past or

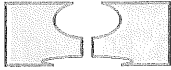


MY SCORE

1. Draw a line through this pentagon to copy Shape A.



2. Which shape will fit the gap?



A



B



C



D

3. Twenty-five past or

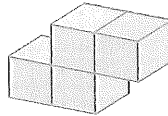


4. Huong buys 5 ice-creams at 50c each. What change will he get from \$5?

5. $15 - 9 =$

6. $7 \times 50 =$

7. Draw a top view.



8. The North Beach Tigers won by 3 goals and 2 points. If a goal = 6 points, how many points did they win by?

9. $28 + 27 =$

10. Your bright red car uses 4 litres of petrol for every 2 km. How much fuel would you need for 20 km?



11. $70 - 8 =$

12. Draw a 3-cm line.

13. $7 \quad 7 = 1$

14. $4 + \quad = 11$

15. $300 + 900 =$

MY SCORE

FRIDAY

1. Draw a line through this pentagon to copy Shape B.



2. $45 + 35 =$

3. Lucy had 6 apples and cut them into halves. Her brother, Oliver, ate 3 pieces. How many apples are left?



A $4\frac{1}{2}$

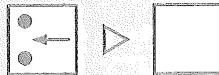
B $5\frac{1}{2}$

C $3\frac{1}{2}$

D 5

4. $14 - 9 =$

5. Flip and draw its position.



6. Twenty-five past or



7. 100, 95, 90, 85,

8. $52 + 24 =$

9. Shade the 100 place value.

2	7	2
---	---	---

10. How much change do you receive if you buy a toy for \$4.80?



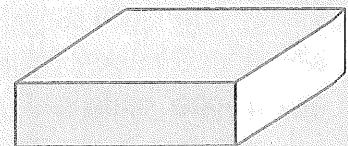
11. $4 + 4 + 4 = \quad \times 4$

12. $8 \times \quad = 80$

13. $6 \times \quad = 600$

14. Double \$50.

15. Name an item at home or school that has this shape.



C

MY SCORE