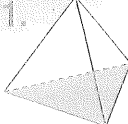


MONDAY

1.  How many faces are on this pyramid?

2. Twenty past

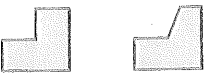
or



3. Which shape will fill the gap?



A B



C D

4. $100 + 80 + 9 =$

5. $50 \times 3 =$

6. $10 \div 5 =$

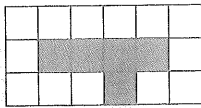
7. $4 \div 4 =$

8. Who can afford to buy this guitar?



- Salif \$50 \$100 \$50
- Connor \$50 \$100 \$100
- Kieran \$100 \$100 \$5

9. What is the area of this shaded shape?



square units

10. 3 hundreds + 4 ones + 7 tens = 374, so
2 hundreds + 3 ones + 6 tens


=

MY SCORE

TUESDAY

1. Twenty past

or



2.  How many edges?

3. Order these from the least to greatest in value.

- A 4×3
- B $50 - 15$
- C $15 \div 5$
- D $25 + 7$

4. $5 + 8 =$

5. $170 - 140 =$

6. Which shape will fill the gap?



A B



C D

7. $50 - 9 =$

8. 4 tens + 2 ones + 3 hundreds =

9. Who can afford to buy this guitar?

- Jakob \$100 \$50 \$20
- Emilie \$100 \$100
- Linh \$100 \$20 \$20



10. Add \$1 50c 20c 20c
10c = \$

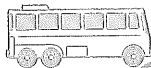

MY SCORE

WEDNESDAY

1. How many corners (vertices)?



2. $40 - 9 =$

3. A  arrived in Bunbury at . The journey took 6 hours. What time did it leave?

4. $110 - 15 =$

5. 8 ones + 6 tens + 3 hundreds =

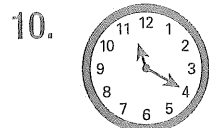
6. $4 \times 50 =$

7. If you add 6 more groups of flowers, what is the total number of flowers?



8. Thomas, William and Georgia ate two bowls of strawberries each. Each bowl held 5 strawberries. How many strawberries were there altogether?



9. $20 \div 10 =$








Twenty past or

MY SCORE

THURSDAY

1. Draw 2 lines to cut this square into four equal parts. 
2. If the time is 8.30, what will it be in 10 minutes?
3. What is the month before July?
4. $400 + 60 + 30 =$
5. If Adrian's watch stopped 3 hours ago, what is the time now? 

6. Which shape will fill the gap? 
 
 A B
 
 C D

7. $5 \times 7 =$

8. $12 - 8 =$

9. $300 + 10 + 9 =$

10. Write the number one after 1099.

11. If you eat 5 apples, 3 bananas and 4 mangoes over 2 days, how many pieces of fruit altogether?

pieces of fruit

12. $5 + 5 + 5 =$ x 5

13. $7 + 7 =$ x 7


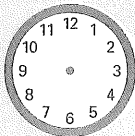
14. Draw a line 5 cm long.

15. $60 - 9 =$



MY SCORE




FRIDAY

1. Draw 4 lines to cut this square into 8 equal parts. 
2. What is the month between September and November?
3. $609 =$ hundreds tens ones
4. $9 + 4 =$
5. 
Draw hands to show 6.20.

6. Add $(20c) (50c) (\$2) (10c)$
 $(5c) (5c) = \$$

7. $4 \times 4 =$


8. $4 + 4 + 4 =$ x 4

9. A green bucket  holds more than a red bucket , and a blue bucket  holds less than a red. Order the buckets.



10. Draw a line 3 cm long.

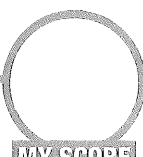
11. $80 - 9 =$

12. How many circular surfaces on a cylinder? 

13. What month follows August?

14. $8 \times 50 =$

15. $90 - 15 =$



MY SCORE