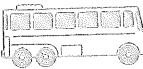




C

MONDAY

- $2 \times 7 = 14$, $20 \times 7 = 140$,
 $3 \times 6 = 18$,
 $30 \times 6 =$

- A  left Bendigo at  and arrived in Ballarat at . How many hours was the bus trip?

- Five past
or



4. $30 + 10 =$

- How many more to make 113?



6. $40 - 10 =$

- Draw a mirror image.



- Fill in the missing numbers.

687	688	689	690	691
697		699		701
707	708			711

9. $30 \div 3 =$

- Write the numbers in the correct range.
86, 201, 674, 420, 289

0 - 200	
201 - 400	
401 - 600	
601 +	

MY SCORE

TUESDAY

- Twenty past
or



- 

(a) Total  =

(b) $12 \div 3 =$

(c) $12 \div 4 =$

3. $30 + 40 =$

4. $40 \div 4 =$

- Is $40 - 30$ less than 9?
 yes no

- How many  make up ?

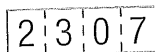
- Interior* means *inside*, while *exterior* means

- 69, , 77, 81, 85

The pattern's rule is +


- Double 14.

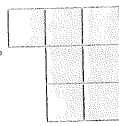
- Shade the 100's place value.



MY SCORE

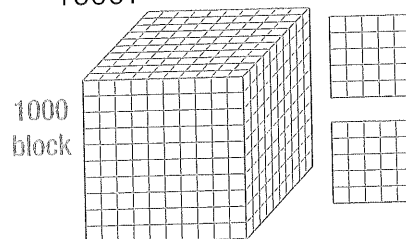
WEDNESDAY

- How many surfaces does this cone have? 

-  Area =
square units
Perimeter =

3. $50 \div 5 =$

- How many more to make 1600?



5. $90 + 50 =$

- Which lines are not 4 cm in length?



- What is the chance of the arrow landing on the banana?




A never

B often

C half

D quarter



- How many  make up the value of  + ?

9. $201 - 10 =$

- Twenty past

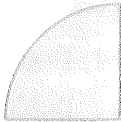
or



MY SCORE

THURSDAY

1. What common shape could you make if you joined four of these shapes together?



2. $30 + 70 =$



Add 5 more groups. How many flowers altogether?

4. Twenty past
or .

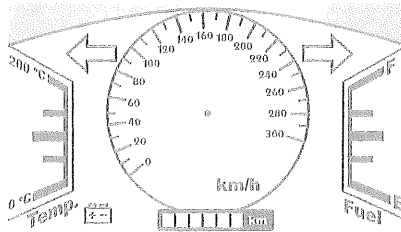


5. $1100 - 200 =$

6. $39 + 35 =$

7. $60 \div 6 =$

8. Draw an arrow to show 230 km/h.



9. Draw an arrow to show one-quarter of the fuel left.

10. Draw an arrow to show 150 °C temperature.

11. $80 - 30 =$

12. $4 + \quad = 11$

13. $3 \times \quad = 18$

14. $20 \div \quad = 4$

15. Halve 30.



FRIDAY

1. Draw 2 lines to change the triangle into a square.



2. $900 + 200 =$

3. $70 \div 7 =$

4. $700 - 200 =$

5. $\text{♪} = 2$

Favourite songs	
'My teacher is crazy'	♪♪
'Moo ... I'm a cow'	♪♪♪♪♪
'La, la! The rat's in the spa!'	♪♪♪

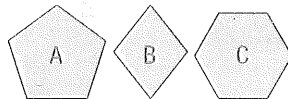
How many liked 'Moo ... I'm a cow'?

6. What is the difference between the least popular and the most popular song?

7. $12 \div 4 =$

8. $1000 + 300 + 50 + 4 =$

9. Which shape is a pentagon?



10. Which shape above is a hexagon?

11. Twenty past
or .



12. 1, 6, 11, 16, , 26
The pattern's rule is

+ .

13. Write 2 number sentences using the number family (\div \times) with 4, 5 and 20.

$\times \quad = \quad$

$\div \quad = \quad$

14. $101 - 10 =$

15. $70 - 20 =$

