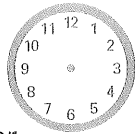


MONDAY

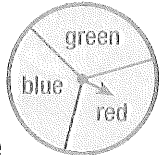


2. What number is one before 200?

3. Draw hands to show 3.10.



4. Write the number between 449 and 451.



5. What is the chance of the arrow landing on red?

- A  1 in 2    B  2 in 1  
C  1 in 3    D  2 in 3

6. If  $4 \times 6 = 24$  and  $24 \div 4 = 6$ , then  $3 \times 8 = 24$ , and  $24 \div \quad = 8$ .

7. Using the number family ( $\times \div$ ), write a division number sentence using 3, 9 and 27.

$\div =$

8.  $400 + 700 =$

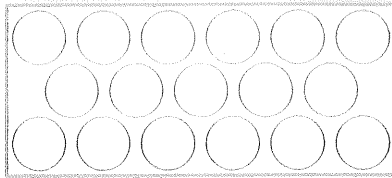
9. Flip  $\rightarrow$

10. If you have four **20c** coins, three **10c** coins and four **5c** coins, how much money do you have altogether?

\$



TUESDAY




Draw a ☺ at these positions.

- Back row, 4th from the left.
- Middle row, 2nd from the right.
- Front row, 1st from the left.
- Shade one-quarter of these cakes.



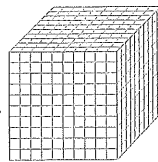
5. Draw hands to show 5.05.



6. Using the number family ( $\times \div$ ), write a multiplication number sentence using 4, 7 and 28.

$\times =$

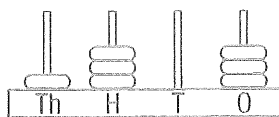
7. Take 6 slices of 100 away. What number do you have left over?



8.  $12 \div 2 =$

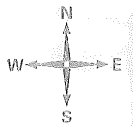


9. If you had 3 **20c** coins, 5 **10c** coins and 3 **5c** coins, how much money would you have altogether? \$

10. Write the amount on the abacus as a number.



WEDNESDAY

1. Draw the other 2 lines of symmetry.



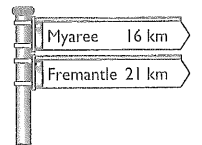
From go north 2, west 4, north 1, east 3, south 3. What is the new position?

3. What is the number before 900?

4. 0, 6, 4, 10, 8, 14, 12, .  
The pattern rule is + ,  
then - .

5. What is the distance between Myaree and Fremantle?

km



6.  $90 + 50 =$


7.  $300 + \quad = 1000$

8. If you had 1 **\$2**, 3 **\$1**, 2 **50c** and 2 **20c** coins, how much money do you have altogether?

\$

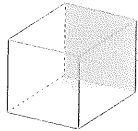
9. How many seconds in a minute?

10. Draw hands to show 4.10.



## THURSDAY


1. How many corners?



2. Draw to show a  $\frac{3}{4}$  turn clockwise.



3. Draw hands to show 7.05.



4. Which month has less than 30 days each year?


5. What number is one after 799?

6.  $500 + 500 =$

7.  $4 + \quad = 13$

8. Which line is not 5 cm long?

A  B  C  D



9. Is  $10 \times 0$  greater than the sum of  $10 + 0$ ?

*yes*     *no*

10.  $11 - \quad = 4$

11. 0, 5, 3, 8, 6, 11, 9,

The pattern rule is + , then - .

12.  $35 + 45 =$

13. Order the buses. A red bus is longer than a blue bus, and a green bus is longer than a red bus.



14.  $600 - 50 =$

15. Write *one thousand and twenty* as a numeral.

MY SCORE

## FRIDAY

1. Draw a mirror image.



2.  $9 \times 100 =$

3. 5:30

Half past

4. What is the number between 1049 and 1051?

5. Write a division number sentence with 3, 4 and 12

$\div \quad =$

6. Order the race cars. Red crossed the finishing line before green. Green crossed before blue and yellow beat green but not red.



7.  $9 + 7 =$

8.  $31 - 5 =$

9.  $11 - \quad = 5$

10. Double 11.

11. Your teacher had 6 50c coins. What is the total amount? \$

12. Alex bought 5 marbles at 20c each. What is the total cost?

13.  $11 - \quad = 8$

14.  $300 - 20 =$

15.  $9 \times \quad = 18$

MY SCORE