


MONDAY

1. Draw to show a $\frac{1}{2}$ turn anticlockwise.



2. $300 - 10 =$

3. or 5 past



4. $27 + 36$

— + ○ + — + ○

= — + ○ =

5.

Start at go west 3, east 2, south 2, west 2, north 4, east 3 and south 4. What position now?

6. $130 - 30 =$

7. $10 \times 4 =$

8. Write *one thousand and ten* as a numeral.

9. 1. Fold paper

2. Cut on dots

3. The paper unfolds as:

A B C D

10. Write the number between 1009 and 1011.



MY SCORE

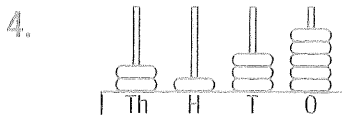
TUESDAY

1. or 5 past



2. $200 - 10 =$

3. Draw to show a $\frac{1}{2}$ turn anticlockwise.



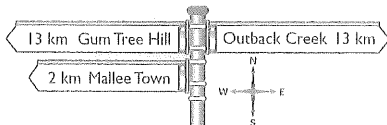
=

APRIL

Su	M	Tu	W	Th	F	Sa
		1	2	3	4	5
6	7	8	9	10	11	12
13	14	15	16	17	18	19
20	21	22	23	24	25	26
27	28	29	30			

5. How many days are in April?
6. What day is the 28th?

7. What date is one week after the 3rd?



8. From the sign, head west. Which town will you arrive at first?


9. What is the distance between Gum Tree Hill and Mallee Town?
- km

10. What is the distance between Outback Creek and Gumtree Hill?
- km



MY SCORE

WEDNESDAY



Shade the following faces.

1. Top row, third from the left.
2. Middle row, second from the right.
3. Front row, first from the left.
4. Order the racehorses.

Horse **3** crossed the line after **8**.

7 crossed the line before **8**, but **6** crossed after **3**.



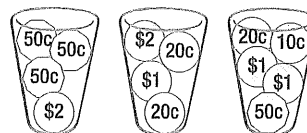
1st 2nd
3rd 4th

5. $10 \times 6 =$
6. 3 hundreds, 0 tens and 8 ones =

7. $600 + 500 =$

8. $500 - 10 =$

9. Which container has the greatest amount of money?



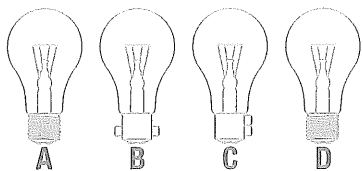
A B C

10. or 5 past



MY SCORE

THURSDAY



1. Which light globe will fit into this socket?



2. Draw to show a $\frac{3}{4}$ turn anticlockwise.



3. $14 - 4 =$

4. .



5. $3 \times 8 =$

6. Classify these 2-D shapes.



Straight lines	Curved lines

7. 4 hundreds, 6 tens and 2 ones =

8. Write the number between 1019 and 1021.

9. $20 \div 4 =$

10. $72 + 10 =$

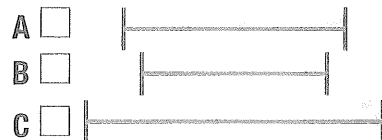
11. $400 - 10 =$



12. Which shape is not a pentagon?

13. How many $20c$ make up $\$2$?

14. Find the line that measures 3 cm.




15. $35 + 35$

$__ + \bigcirc + __ + \bigcirc$
 $= __ + \bigcirc =$



FRIDAY



Shade the following faces.

1. Front row, second from the right.

2. Top row, third from the right.

3. Middle row, second from the left.

4. What position is ?

5. What position is ?

6. How many $20c$ coins make up $\$1$?

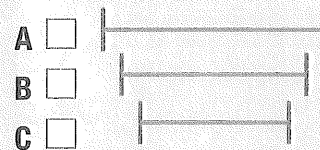
7. Using the number family (+ -), write a number sentence with 20, 12 and 8.

8. $10 \times 8 =$

9. 5 hundreds, 4 tens and 3 ones =

10. How many $50c$ coins make up $\$2$?

11. Find the line that measures 2 cm.



12. $200 - 10 =$

13. $14 + 47 =$

14. $3 \times 9 =$

15. Fill in the missing numbers.

181	182	183	184
		193	
	202		
211	212	213	

