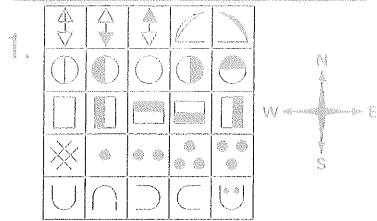


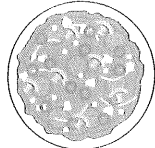
MONDAY



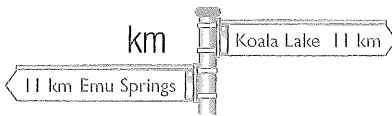
Start at the top right-hand corner. Go west 3, go south 3, east 2 and north

2 and you land on .

2. Draw a line to cut this pizza in half.



3. How far is it from Koala Lake to Emu Springs?



4. $8 + 7 =$

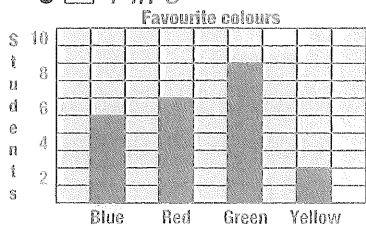
5. $14 - 7 =$

6. What is the chance of the arrow landing on 5?

A 5 in 6

B 1 in 5

C 1 in 6



7. Which colour is the most popular?

8. Is yellow more popular than blue?

9. How many students like green?

10. $210 =$ hundreds, tens and ones

MY SCORE

TUESDAY

1. This pizza is cut into:

halves.

quarters.

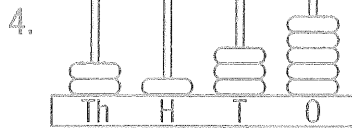


2. Using addition and subtraction (+, -) with 5, 9 and 14, write two number sentences.

$+ =$

$- =$

3. $300 + 800 =$



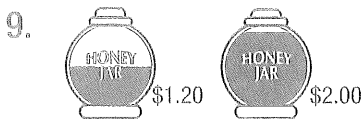
$=$

5. $800 - 50 =$

6. Write *one hundred and eight* as a numeral.

7. $9 \quad 3 = 27$

8. $410 =$ hundreds, tens and ones



Big Ted has \$2. He wants to buy honey. Which is the cheaper choice?

A Buy two half tubs.

B Buy one full tub.

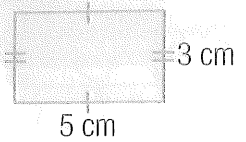
- 10.

A	B	C	D
A	B	C	D
A	B	C	D

Is CCC a row or a column?

MY SCORE

WEDNESDAY



1. Perimeter = cm

2. $900 - 50 =$

3. $46 + 5 =$

4. $30 \div 3 =$

5. 0, 4, 3, 7, 6, 10, 9,

6. Measure line \overline{AB} , then draw a line half of this length and mark as \overline{CD} .



$\overline{AB} =$

7. $1000 + 200 + 70 + 8 =$

8. $2 \quad 1 = 2$

9. Order from youngest to oldest.



Sally

(Born 6 April 2001)



Colin

(Born 24 April 2000)



Paul

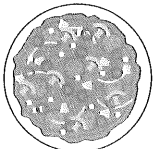
(Born 7 July 2001)




Sarah

(Born 26 January 2000)

10. Draw two lines to cut this pizza into quarters.



MY SCORE



A = double of B

B = half of C

1. How many extra B weights would you need to balance the scale?

2. $16 - 7 =$

3. $300 + 900 =$

4. $900 - 50 =$

5. Which expression creates the greatest value?

A 5×7

B $100 - 60$

C $21 + 20$

D double 20

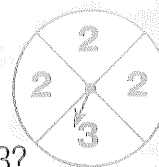
6. $4 \times 2 = 8$

7. $910 =$ hundreds, tens and ones

8. Is midnight at:
 12 pm, 6 am or
 12 am?

9. $20 \div 2 =$

10. What is the probability of the arrow landing on a 3?



- 1 in 3 1 in 4
 3 in 4 2 in 3

11. 80, 75, 70, , 60

12. $20 + 30 =$

13. $9 + 5 =$

14. Write the number one before 600.

15. 1000, 2000, 3000,



MY SCORE

1. Turn this picture upright by shading the correct arrow.



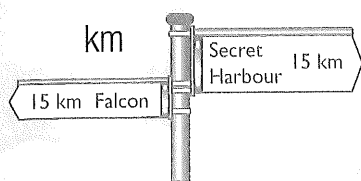
A $\frac{1}{4}$ turn

B $\frac{1}{4}$ turn

C $\frac{1}{2}$ turn

D $\frac{3}{4}$ turn

2. How far is it from Falcon to Secret Harbour?



3. 500, 550, 600, , 700

4. $4 \times 7 =$ + +
 + =

5. $26 + 29$
 — + ○ + — + ○
 = — + ○ =

6. Circle one-quarter of the flowers.



7.



8. $3 \times 10 =$

9. $18 \div 2 =$

10. You have \$2 and 20c. What coins are needed to make \$3?

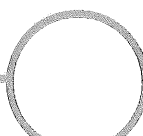
11. $100 + 900 =$

12. 5 1 = 5

13. 3, 6, 9, , 15

14. $60 + 70 =$

15. Double 12.



MY SCORE