

MONDAY

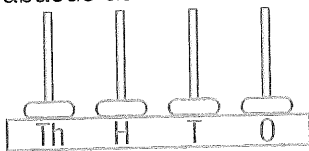
1. Draw to show a $\frac{1}{4}$ turn anticlockwise.



2. $6 + 7 =$

3. Arrange 3, 1, 2 and 4 to create the largest value.

4. Write the amount of the abacus as a numeral.



5. Turn this picture upright by shading the correct arrow.



A



B



C

$\frac{1}{4}$ turn $\frac{1}{4}$ turn $\frac{1}{2}$ turn

6. Add **50c** **10c** **20c**

= **C**

7. How many **50c** coins make up **\$1**?

8. How many **50c** coins make up **\$2**?

9. $20 - 5 =$

10. 100 = tens and ones

TUESDAY

1. 11.15 or 12.45? Tick your answer.



2. Write the number between 199 and 201

3. Draw a pentagon.

4. $14 \div 2 =$

5. $89 - 10 =$

6. How many **20c** make up **\$1**?

MARCH						
Su	M	Tu	W	Th	F	Sa
						1
2	3	4	5	6	7	8
9	10	11	12	13	14	15
16	17	18	19	20	21	22
23	24	25	26	27	28	29
30	31					

7. What date is the first Sunday in March?

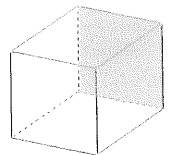
8. What date is the first Wednesday in March?

9. What date is the last Monday in March?

10. What day is the first?

WEDNESDAY

1. How many corners?



2. How many **10c** make up **\$1**?

3. 2, 6, 10, 14,

4. $390 + 10 =$

5. What is the perimeter of this shape?

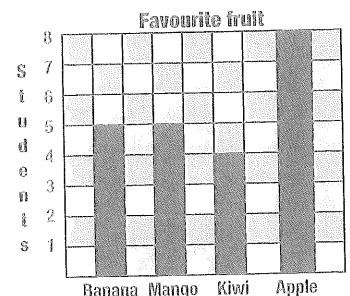
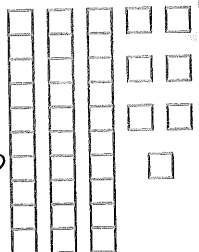


A 18 units

B 16 units

C 14 units

6. How many more blocks are needed to make 50?



7. Which fruit is the most popular?

8. Which is the least popular?

9. How many children like mango?

10. 1.45 or 12.45? Tick your answer.



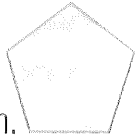
MY SCORE

MY SCORE

MY SCORE

THURSDAY

1. Draw a line of symmetry on this pentagon.



2. $11 - 5 =$

3. 5.45 or 6.45? Tick your answer.



4. The afternoon begins after:

- midnight.*
- midday (noon).*
- dawn.*

5. $6 + 8 =$

6. $3 \quad 4 = 7$


7. $9 \quad 3 = 3$

8. Double 12.

9. How many 50c make up \$2?

10. A left Hobart at and arrived in Launceston at . How many hours was the bus trip?

11. Weight B is half the weight of C and A weighs more than C. Are the scales true or false?



12. $70 + 60 =$

13. (a) How many hours in one day?

(b) How many minutes in an hour?

(c) How many seconds in a minute?

14. $190 + 10 =$

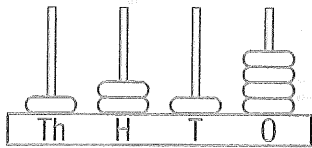
15. $21 \div 3 =$

MY SCORE

FRIDAY

1. $490 + 10 =$

2. Write as a number.



3. 8.45 or 9.45? Tick your answer.



4. $8 \times 100 =$

5. $7 \quad 2 = 14$

6. $400 - 50 =$

7. $4 \times 6 =$

8.

Start at the middle row far left, go north 2, east 3, south 4 and you land on

9. $53 + 29$

$— + \bigcirc + — + \bigcirc$
 $= — + \bigcirc =$

10. $700 + 4 =$

11. Write *one thousand and eleven* as a numeral.

12. $800 - 10 =$

13. How many 10c make up \$3?

14. Draw a hexagon.

15. Double the blocks =

MY SCORE